

MARTHOMA RESIDENTIAL SCHOOL, THIRUVALLA

SECOND TERMINAL EXAMINATION DECEMBER 2018

STD. I

MATHEMATICS

Time: 1½ hrs

Marks: 50

Name _____

Roll: No. _____

I. Do as directed .

3

a) $7 + 0 =$ _____

b) $9 - 2 =$ _____

c) $5 \times 0 =$ _____

d) $4 + 6 =$ _____

e) $2 + 4 + 5 =$ _____

f) 4 tens + 3 ones = _____

II. Add by forward counting.

3

a) $85 + 3 =$ _____

b) $17 + 5 =$ _____

c) $44 + 7 =$ _____

III. Subtract by backward counting.

3

a) $98 - 4 =$ _____

b) $56 - 9 =$ _____

c) $32 - 5 =$ _____

IV. Complete the skip counting .

3

a) 20, 25, _____, _____, _____, _____ 50.

b) 3, 6, _____, _____, _____, _____ 21.

c) 40, 50, _____, _____, _____, _____ 100.

V. Multiply the following.

2	5	1	10	5	2	10
x	x	x	x	x	x	x
4	8	9	3	6	3	7
_____	_____	_____	_____	_____	_____	_____





VI. Add the following

23	67	40	34
+ 42	+ 20	+ 30	+ 3
_____	_____	_____	_____

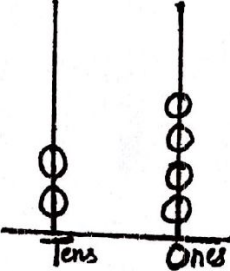
VII. Complete the pattern.

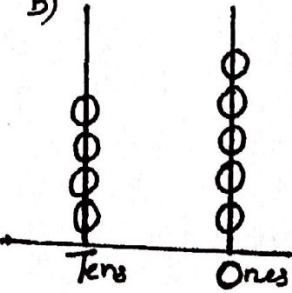
a) A, B, A _____, _____, _____.

b)     _____.


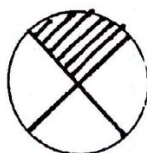
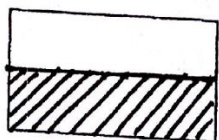

c)     _____.

VIII. Subtract on the abacus.

a) 
 $24 - 12 = \square$

b) 
 $45 - 3 = \square$

IX. Write whether the shaded part is half ($\frac{1}{2}$) or quarter ($\frac{1}{4}$)



X. Count and write the multiplication fact as repeated addition.

4

a) $\diamond\diamond\diamond\diamond\diamond + \diamond\diamond\diamond\diamond\diamond$

_____ + _____ = _____ x _____ = _____.

b) $\diamond\diamond + \diamond\diamond + \diamond\diamond$

_____ + _____ + _____ = _____ x _____ = _____.

XI. Match the following.

5

5×5

14

$7 + 7$

4

4×1

25

$5 - 5$

2

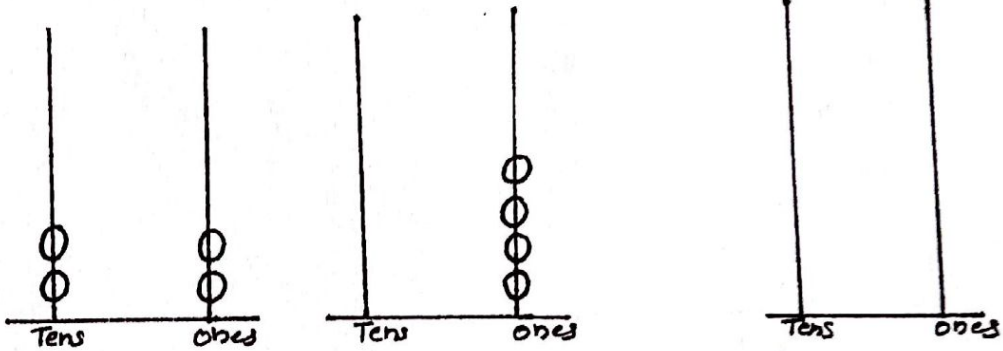
$8 - 6$

0

XII. Add on the abacus.

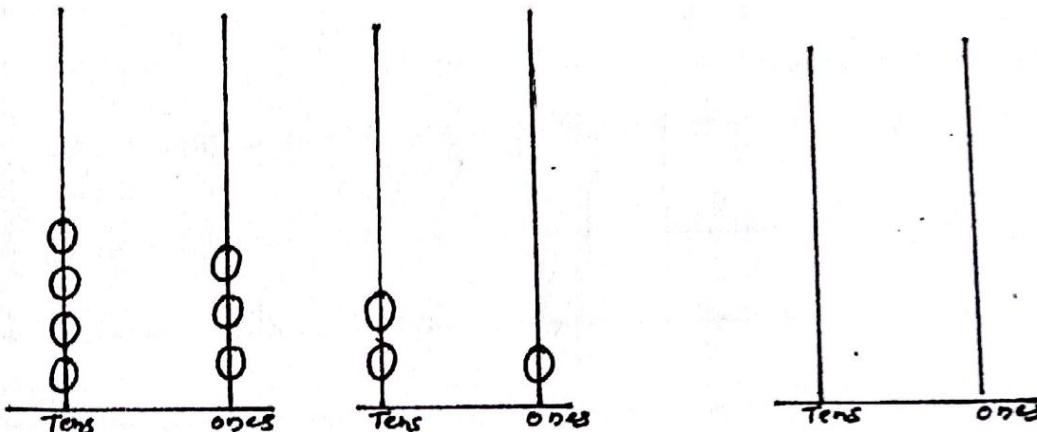
2

a)



$22 + 4 = \boxed{}$

b)

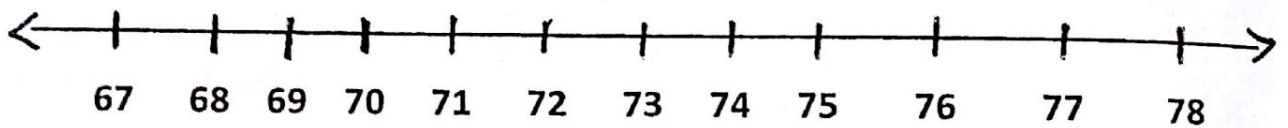


$43 + 21 = \boxed{}$

XIII. Write the multiplication table of 2

2 ½

XIV. Add on the numberline.



$69 + 5 = \underline{\hspace{2cm}}$

XV. Subtract the following.

4	9	3	6	5
<u>-3</u>	<u>-7</u>	<u>-0</u>	<u>-4</u>	<u>-2</u>
<u> </u>	<u> </u>	<u> </u>	<u> </u>	<u> </u>

XVI. Solve the word problem.

Mira had 9 crayons. She gave 3 to Tina. How many does she have now ?
