

STD.I

Time: 1 ½

Marks : 50

Name _____

Roll. No. _____

I.Fill in the blanks

5

- a) A week has _____ days.
- b) _____ is the last month of the year.
- c) The standard unit to measure length is _____.
- d) _____ is between April and June.
- e) 1 rupee = _____ paise.
- f) 6 tens + 8 ones = _____.
- g) $200 + 30 + 5 =$ _____.
- h) 1 hour = _____ minutes.
- i) _____ is the day after Thursday.
- j) $11 + 9 =$ _____.

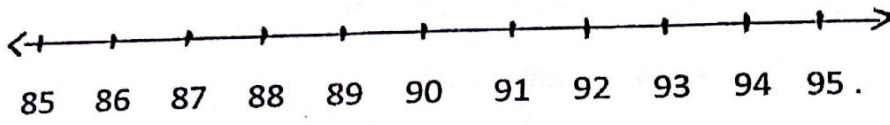
II. Subtract by backward counting

5

- a) $38 - 3 =$ _____
- b) $53 - 8 =$ _____
- c) $82 - 5 =$ _____
- d) $18 - 7 =$ _____
- e) $91 - 4 =$ _____

III. Add on the number line

2



$87 + 4 = \underline{\hspace{2cm}}$

IV. Fill up missing numbers

3

a) 189, , , 192, , 194, .

b) , , 347, 348 , 350 .

c) 413, , , 416, , , 419.

V. Multiply

5

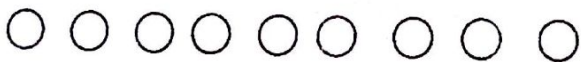
| | | | | |
|---------------|---------------|---------------|---------------|---------------|
| 10 | 2 | 5 | 1 | 2 |
| X 4 | x 6 | x 3 | x 9 | x 9 |
| <u> </u> | <u> </u> | <u> </u> | <u> </u> | <u> </u> |
| <u> </u> | <u> </u> | <u> </u> | <u> </u> | <u> </u> |

VI. Cross out and subtract

2



$5 - 4 = \underline{\hspace{2cm}}$





$9 - 2 = \underline{\hspace{2cm}}$

VII. Write the multiplication table of 5


VIII. What time do the clock show

2



IX. Look at the pictograph and answer the question.

4



a) How many lions are there? _____

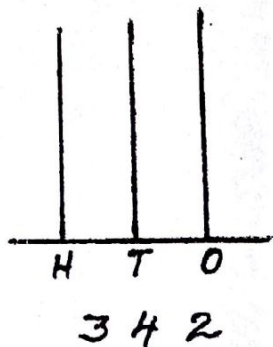
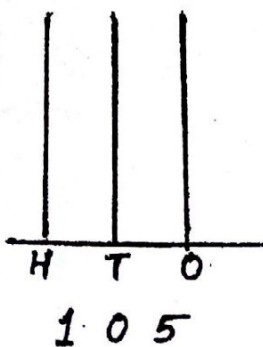
b) How many giraffes are there? _____

c) Which animal is least in number? _____

d) which is the biggest animal? _____

X. Draw beads on the abacus.

2



XI. Match the following

$1 + 2 + 5$

6

$2 + 2 + 2$

8

10×10

9

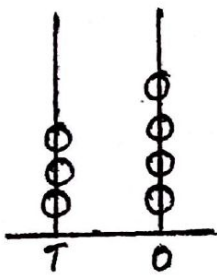
$10 - 0$

100

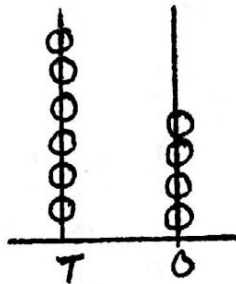
$6 + 0 + 3$

10

XII. Subtract on the abacus



$34 - 2 = \underline{\hspace{2cm}}$

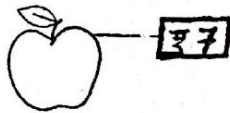
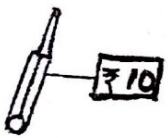


$64 - 21 = \underline{\hspace{2cm}}$


XIII. Add the money.




+

= 

+

=

XIV. Tick (✓) the object with least capacity.



XV. Solve the word problem

3

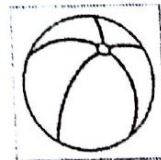
Abin had 15 mangoes. Kevin had 8 mangoes. How many did they have together?

XVI. Put a (✓) on the

2

a) shorter arrow

b) heavier object



XVII. Add the following

5

| | | | | |
|-------|-------|-------|-------|-------|
| 16 | 44 | 40 | 52 | 15 |
| +20 | +22 | +30 | +34 | +11 |
| <hr/> | <hr/> | <hr/> | <hr/> | <hr/> |
| <hr/> | <hr/> | <hr/> | <hr/> | <hr/> |