


**ALL KERALA ASSOCIATION OF ISC SCHOOLS
SCHOLARSHIP EXAMINATION – OCTOBER 2012**



STANDARD – IV

Date of Examination: 19 Oct 2012

Starting Time : 10 am

Max Marks: 50

Time : 1 hr

School Code KE :

Register No :

Name in Block Letters :

Signature of the Supervising Examiner :

Read the following instructions carefully. You will not be allowed to write during the first five minutes. This time is to be spent in reading the instructions. The time given on this question paper is the time allowed to write the answers. Answers must be written in the space provided along with each question. This question paper consists of four sections. All sections are to be answered.

**SECTION 1
ENGLISH (12 MARKS)**

I. Write antonyms

2 Marks

1. Defend
2. Ancient
3. Borrow
4. Cowardly

II. Match the synonyms

3 Marks

Drowsy	Praise
Courteous	Serious
Cheat	Empty
Vacant	Sleepy
Admire	Polite
Grave	Deceive

III. Change to indirect narration

1 Mark

1. He advised me, "Get ready and go there with your friends".

Ans: _____

IV. Change the tense of the word to the present perfect

1 Mark

1. Richard will go home.

Ans: _____

V. Change into negative sentence

1 Marks

1. She drank the milk.

Ans: _____

VI. Fill in the blanks with the correct words given in the brackets.

1 Mark

1. How often do you _____ in winter? (bath, bathe)

2. He works _____ and is liked by all (hard, hardly)

VII. Complete the following story by filling the blanks suitably

3 Marks

Three Greedy Persons

Once there were three _____ (thief). They had stolen a pot of gold. While they were returning they _____ (stay) in an inn. One of them _____ (go) to the market to _____ (buy) food. He _____ (think) that if he mixed poison in food the other two _____ (die) and he will get all the gold. On the other hand, the other two _____ (decide) to kill the third man to _____ (grab) his share. When the third man returned with the poisoned food, they _____ (kill) him. Then they comfortably _____ (eat) the poisoned food and _____ (die). Their greed and dishonesty _____ (destroy) all of them.

SECTION 2

MATHEMATICS (15 MARKS)

I. Fill in the blanks

5 Marks

1. $8426 \times 0 \times 0$ is _____

2. 4 kilometer = _____ cm

3. $720 + 15$ is _____

4. If the digit in the one's place is either 0 or 5, the number can be divisible by _____

5. When 17500 is divided by 1000, remainder will be _____


II. Do as directed

5 Marks

1. Find the missing numbers.

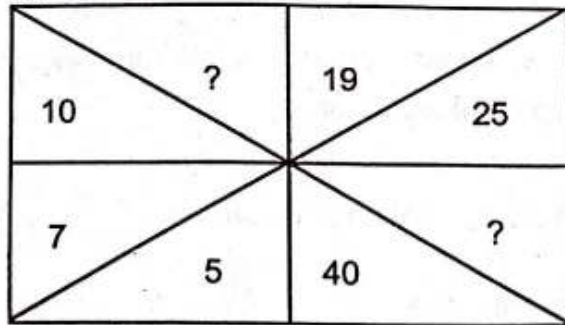
8	-	5	4	9	-	1
<u>5</u>	2	4	-	6	4	-
3	1	0	7	2	8	0

2. Find the perimeter of the given figure.



3. Find the area of a rectangle whose length and breadth are 32 cm and 4 cm.

4. Fill the missing numbers



5. Arrange the given numbers in descending order

9195, 9951, 9938, 9915, 9999

III. Choose the correct answer

5 Marks

1. The only even prime number is _____

(1, 2, 3, 5)

2. $\frac{3}{8} = ?/24$

(3, 9, 18, 24)

3. $\frac{1}{3}$ of an hour is _____ minutes

(30, 20, 45, 15)

4. $\frac{1}{2} + \frac{4}{2}$ is _____

(1, 2, 4, $\frac{1}{4}$)

5. Successor of 284739 is _____

(284623, 294739, 280111, 284740)

SECTION 3

SCIENCE (15 MARKS)

I. Fill in the blanks

5 Marks

1. The young one of cockroach is called _____

2. _____ is the universal solvent.

3. The process of changing water vapour into water by cooling is called _____.

4. _____ is a natural source of light.

5. The continuous process of change of water to water vapour and then back to water is called _____

II. Choose the correct answer

4 Marks

1. On an average we breathe _____ times. (12-20, 72-80, 200-300, none)
2. Which of the following is not directly associated with respiration (Bronchus, Lungs, Nerves, Air sacs)
3. _____ is the process of breaking up of rocks into soil. (soil erosion, weathering, subsoil, soil fertility)
4. Going far away from home in winter and coming back in summer is called _____ (migration, condensation, respiration, water cycle)

III. Pick up the odd one out

3 Marks

1. Dehydration, Pasteurization, Refrigeration, Evaporation
2. Calcium, Iron, Iodine, sugar
3. Scissors, Chocolate, Cotton, Ointment

IV. State whether the following statements are Right or Wrong

3 Marks

1. If an electric spark is noticed, turn off the main switch immediately.
2. Tight and dark coloured synthetic clothes are recommended during summers.
3. Each traffic signal indicates an instruction to be followed.

SECTION 4
GK (8 MARKS)

I. Choose the correct answer

6 Marks

1. Who is the author of the novel Chemmeen?
(Madhavan Nair, Thakazhi, Vallathole, RK Narayan)
2. Which is the venue of 2016 Olympics?
(London, Russia, Rio - de Janeiro, India)
3. Over which river is Howrah bridge built?
(Hoogli, Kaveri, Yamuna, Ganga)
4. Which Indian city is called the pink city?
(Jodhpur, Agra, Jaipur, Jhansi)
5. Which state does the Kanha national park situated?
(Madhya Pradesh, Orissa, Assam, Gujarat)
6. Who described Kerala as a mad house?
(Sri Narayana Guru, Chattampi Swamikal, Rajaram Mohan Rai, Swami Vivekananda)

II. Develop the abbreviation

2 Mark

1. BSNL
2. VAT